


TÖRTEK




Mindegyik ábra 1 egész. Színezd ki az egész megadott részét!


$$\frac{4}{7}$$




$$\frac{2}{8}$$



$$\frac{3}{7}$$




$$\frac{4}{4}$$




$$\frac{1}{3}$$



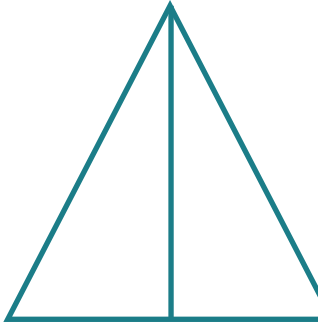
$$\frac{2}{5}$$



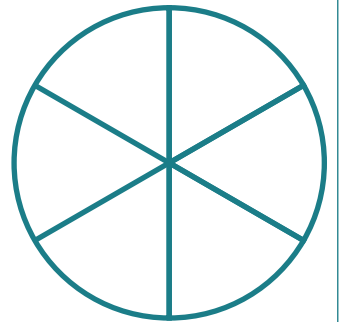
$$\frac{1}{5}$$



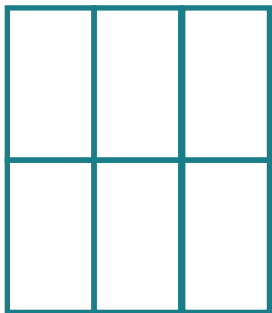
$$\frac{1}{2}$$




$$\frac{5}{6}$$




$$\frac{3}{6}$$



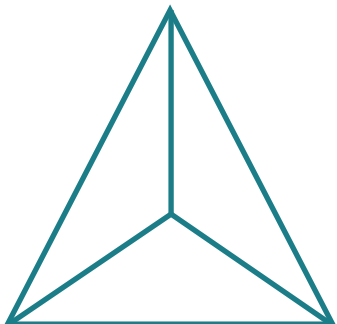
$$\frac{2}{8}$$



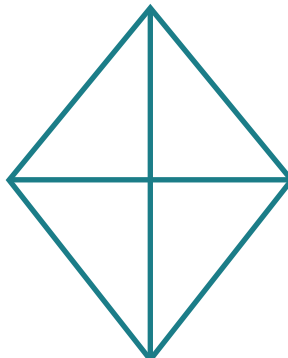
$$\frac{6}{6}$$



$$\frac{3}{3}$$



$$\frac{3}{4}$$



$$\frac{5}{8}$$

